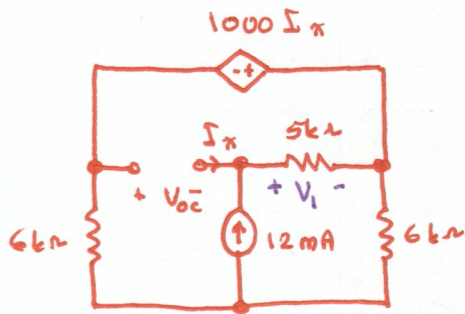
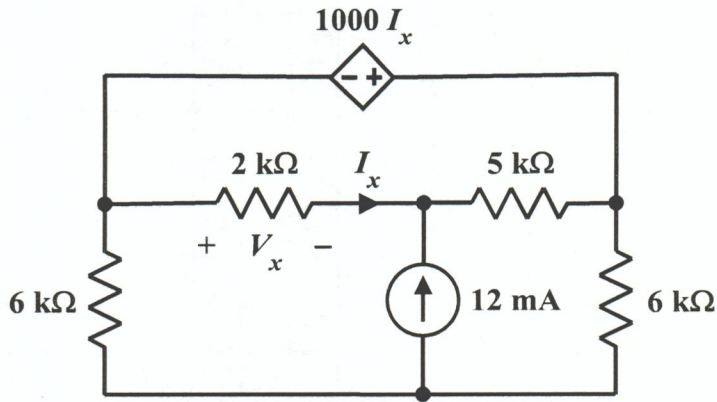


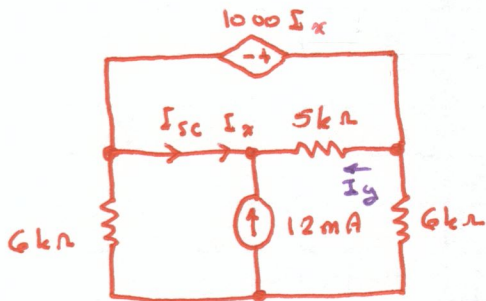
EE 2240
Problem #05

Treat the $2\text{k}\Omega$ resistor as the load, and use Thévenin's Theorem to determine V_x .



$$I_x = 0 \Rightarrow V_1 = (5\text{k}\Omega)(12\text{mA}) = 60\text{V}$$

$$\Rightarrow 1000 I_x = 0 \Rightarrow V_{oc} = -V_1 = -60\text{V}$$



$$I_y = \frac{1000 I_x}{5\text{k}\Omega} = \frac{1}{5} I_x$$

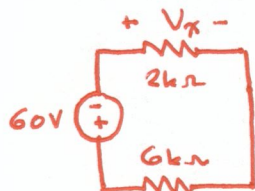
$$I_y + I_x = -12\text{mA} \Rightarrow 1.2 I_x = -12\text{mA}$$

$$\therefore I_x = -10\text{mA}$$

$$I_{sc} = I_x = -10\text{mA}$$

$$V_T = V_{oc} = -60\text{V}$$

$$R_T = \frac{V_{oc}}{I_{sc}} = \frac{-60\text{V}}{-10\text{mA}} = 6\text{k}\Omega$$



$$V_x = - \frac{2\text{k}\Omega}{2\text{k}\Omega + 6\text{k}\Omega} (60\text{V}) = -15\text{V}$$